

1st Class work for week of 23rd March – 27th March 2020

Daily work

- New wave Mental maths Week 27
- Homework copies – Work it out week 12 (This should already be in HW copies, if not please see below for copies)
- Spellbound – one box and exercise per day Week 26
- Morning work in Copies each day- day 45, 46, 47 and 48 (This should already be in Morning copies, if not please see below for copies)
- Complete reading daily (1st class – The bouncing castle- poems)
- Continue to encourage additional reading
- Complete oxford reading
- Revise tables up to -9

English

- Away with words- Pg 67&68 (The Nest), Pg 70 (Magic e)
- Additional worksheet -Unit 18 Language

Maths

- Mathemagic - Pg 118 and Pg145
- Figure it Out – Pg 68, Pg 71 and Pg 72

SESE

Geography – We have been working on a Mexico project recently. I have attached a postcard template below. Ask your child to complete the postcard as if they were writing it to someone in Mexico. They can share any facts they already know and encourage them to ask questions to the person when writing their postcard.

History – We have been learning about homes in the past, children have looked at examples of homes from the past and from today. They have compared the physical appearances of both. I have attached a worksheet below, the children will draw a home of the past and a home of today. They will then write a few sentences describing the differences.

Science- We have been working on floating and sinking and materials and change. If possible try to carry out some water play at home. Choose a number of suitable objects from around the home. Ask your child to predict whether these items will float or sink. Have your child record and give reasons for their prediction. Engage in discussion about materials the item is made from and why this may impact floating or sinking. Carry out the floating and sinking experiment.

MONDAY - WEEK 12

- T** 1. 2 + 4 =
- A** 2. 2 + 0 =
- B** 3. 2 + 7 =
- L** 4. 2 + 6 =
- E** 5. 2 + 5 =
- S**

Black ☐ ☐ ☐ ☐ ☐

White ☐ ☐ ☐ ☐ ☐

Blue ☐ ☐ ☐ ☐ ☐

6. How many blue?
7. How many white?
8. How many black and blue?


9.  = c

Work it out 

10. Ring the odd numbers.

2 3 4 5 6 7

11. Tick which holds more.



12. 10 - 4 =

13. Finish the pattern.



14. 2 more than 30 is .

15. Fill in the missing numbers.

29, , 31, , , 34,

☐ ☐ ☐ ☐ ☐ ☐ ☐ ☐ ☐ ☐

Score

TABLES TUESDAY - WEEK 12

1. 2 + = 9
2. 2 + = 10
3. 2 + = 3
4. 2 + = 7
5. 2 + = 2
6. 2 + = 5
7. 2 + = 4
8. 2 + = 6
9. 2 + = 8
10. 2 + = 12
11. + 2 = 6

12. + 2 = 3
13. + 2 = 7
14. + 2 = 4
15. + 2 = 10
16. + 2 = 2
17. + 2 = 9
18. + 2 = 11
19. + 2 = 5
20. + 2 = 8

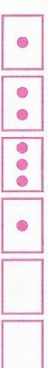
☐ ☐ ☐ ☐ ☐ ☐ ☐ ☐ ☐ ☐

Score

WEDNESDAY - WEEK 12

- T** 1. 2 + = 5
- A** 2. 2 + = 10
- B** 3. 2 + = 4
- L** 4. 2 + = 9
- E** 5. 2 + = 12
- S**

6. Finish the pattern.



7. How many days in October?

8.  How many wheels?

9. Colour half.

Work it out 

10.  Pat has c.

11. 3 less than 20 is .

12. 10 - 3 =

13. Fill in the missing numbers.

28, , 30, , , , 34,

14. Tick the heavier one. ☐  ☐

15. Ring the odd numbers.

7 8 9 10 11 12

☐ ☐ ☐ ☐ ☐ ☐ ☐ ☐ ☐ ☐

Score

THURSDAY - WEEK 12

- T** 1. + 2 = 11
- A** 2. + 2 = 7
- B** 3. + 2 = 6
- L** 4. + 2 = 8
- E** 5. + 2 = 2
- S**

6. How many days in June?

7. Colour half.

8. Fill in the missing numbers.

32, , , 35, , 37,


9.  A cube has edges.

10. 2 more than 39 is .

11. Ring the even numbers.

19 20 21 22 23

12. 10 + = 15

13.  Ring the coins you need.



14. 10 - 6 =



15. Finish the pattern.



☐ ☐ ☐ ☐ ☐ ☐ ☐ ☐ ☐ ☐

Score

DAY 45

1. What letter is missing?

h i j l

2. Write the capital letter that goes with **k**.

3. Which word is correct?

☐ July ☐ Jooleyey

4. How many syllables in **boof**?

5. Fill in **sh** or **ch**.

jimney

6. Circle the correct spelling.

Friday Fryday

7. Find a small word in **brown**.

8. The opposite of **up** is:

☐ down ☐ under

9. Fill in **Why** or **Who**.

are you going to town?

10. Tick what is missing from the sentence.

You can put the toys away now

☐ capital letter ☐ full stop



MY SCORE

DAY 46

1. What letter is missing?

e f g i

2. Write the capital letter that goes with **h**.

3. Which word is correct?

☐ Aperill ☐ April

4. How many syllables in **November**?

5. Fill in **sh** or **ch**.

ff

6. Circle the correct spelling.

Saturday Saturday

7. Find a small word in **will**.

8. The opposite of **dark** is:

☐ light ☐ night

9. Fill in **Why** or **Who**.

is your best friend?



10. Tick what is missing from the sentence.

One day, there was a big storm

☐ capital letter ☐ full stop

MY SCORE

DAY 47

1. What letter is missing?

a b c e

2. Write the capital letter that goes with **d**.

3. Which word is correct?

☐ May ☐ Mayy

4. How many syllables in **foof**?



5. Fill in **sh** or **ch**.

di

6. Circle the correct spelling.

Sunday Sunday

7. Find a small word in **want**.

8. The opposite of **slow** is:

☐ fast ☐ thin

9. Fill in **Where** or **When**.

does Ryan live?

10. Tick what is missing from the sentence.

If we push and pull, it will go

☐ capital letter ☐ full stop

MY SCORE

DAY 48

1. What letter is missing?

a c d e

2. Write the capital letter that goes with **b**.

3. Which word is correct?

☐ Marsh ☐ March

4. How many syllables in **very**?

5. Fill in **sh** or **ch**.

lun

6. Circle the correct spelling.

Munday Monday

7. Find a small word in **toy**.



8. The opposite of **last** is:

☐ second ☐ first

9. Fill in **Where** or **When**.

is it time for lunch?

10. Tick what is missing from the sentence.

They will come to your school

☐ capital letter ☐ full stop

MY SCORE

Unit 18 - Language





A Write each sentence correctly.

Example: lovely was It a day sunny. It was a lovely sunny day.

1. escaped elephant The.
2. down walked the He street.
3. children were The in park the.
4. went park He into the.
5. fun swing on He had the.

B Match the words and pictures.

playing eating swinging crying

<p>1.</p>  <p>c r y i n g</p>	<p>2.</p>  <p>_____</p>	<p>3.</p>  <p>_____</p>	<p>4.</p>  <p>_____</p>
---	---	--	---

C All about me!

I am _____ today. (happy, grumpy, tired)

I have _____ and _____ for my lunch.

My favourite drink is _____.

I will play with _____ today.

I hope I get _____ for my dinner.

I hope _____ will be on television.

Draw a picture of your favourite dinner.



PLACE
STAMP
HERE

Homes

Name: _____

Date: _____

In the boxes below draw a home of the past and a home of today. Think of all the things you learned today to help you with your drawings. Label the features of the home.

Home of the past

Home of today

Write a few sentences about how the homes are different. For example: Homes in the past had small windows. Homes today have large windows.