



Junior Maths Trail



1. Find 3 circles in your house or garden and name them.

2. Count the number of trees in your garden.
3. Count the number of flowers/flower pots in your garden.
4. Add the number of trees and flowers/flower pots.

5. Measure in steps the length of your bedroom.


Length _____ steps

6. How many star jumps can you do in 1 minute?

7. Measure in steps the width of your garden.

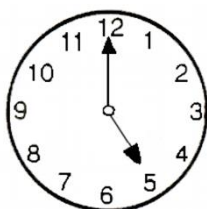
Width _____ steps

8. What time does the clock show?



_____ o'clock

9. This clock shows the current time. What time will it be in 2 hours time?



_____ o'clock

10. How many legs are around your dining room/kitchen (chair and table legs)?

11. Write the name of an object in your home that is the shape of a:

Cylinder _____

Cube _____

Cuboid _____

Sphere _____

Prism _____

12. What day is it today? _____

13. What day was it yesterday? _____

14. What day will it be tomorrow? _____


15. What day will it be in 3 days? _____

16. Draw a girl to the left of the car.

Draw a cat on top of the car.

Draw a tree to the right of the car.


Draw a football underneath the car.



17. Colour the set that has more.




18. Draw a red circle around the heaviest animal. Draw a blue circle around the lightest animal.



19. Draw a dog using only squares and triangles



20. Make a list of 3 things that are about the same length as your hand



21. How many cars are parked at your house?

22. How many wheels are there in total?

23. How many doors are in your house?

24. How many windows are in your house?


25. What is the total number of doors and windows in your house?

26. How many times can you bounce a ball in 30 seconds?

27. Make a triangle from twigs.

28. Count the spokes on the front wheel of your bike. Double it (as there are 2 wheels).

29. Colour the child in first place green and in last place yellow.



30. While out for a walk with mum or dad look out for road signs. How many did you see?